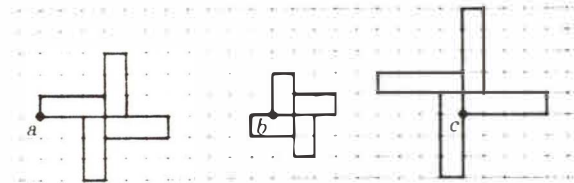


(continued from page 21)

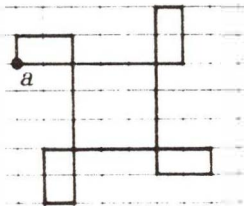
## Answers:

1. Yes

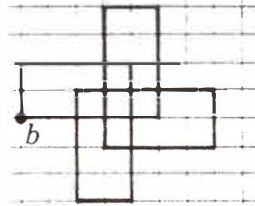
2. Yes



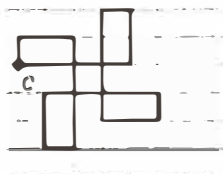
3.



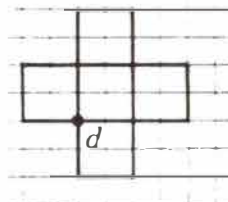
Type B



Type C



Type B



Type C

6. The sum of the two smaller numbers is equal to the largest.
7. The sum of the two smaller numbers is less than the largest.
8. The sum of the two smaller numbers is greater than the largest.
9. a) A      b) C      c) B  
d) A      e) C      f) A
10. Square the difference between the largest number and the sum of the two smaller numbers.

 PRINTED AT  
BARNETT HOUSE